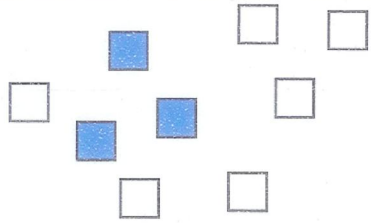


# Numération Opérations

Cycle 2 - Niveau 1

Comparaisons de nombres  
Rangements


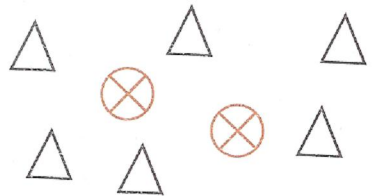

Test 1



$$3 < 6$$

$$6 > 3$$

C A C A  
C A C C




# Numération Opérations

Cycle 2 - Niveau 1

Comparaisons de nombres  
Rangements

Test 1



$$3 < 6$$

$$6 > 3$$

C A C A  
C A C C

